



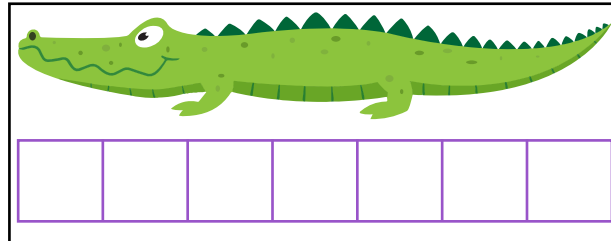
NAME \_\_\_\_\_ DATE \_\_\_\_\_

## MEASUREMENTS OF VARIOUS OBJECTS


### Measurements of animals.

George collected some animal stickers. Use the centimeter cubes to measure the stickers. Write the length of each stickers in the blank.

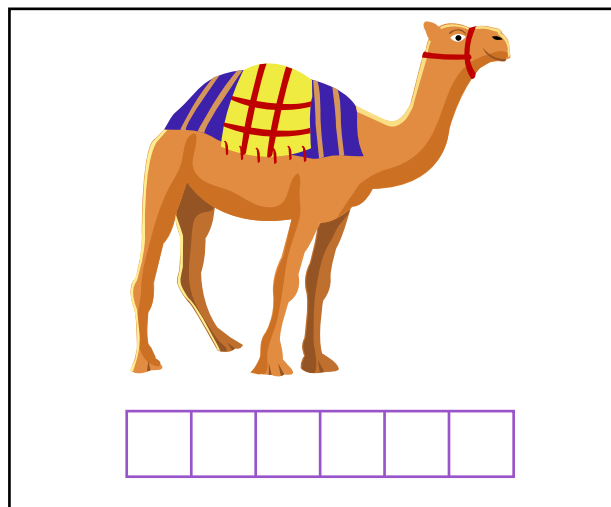
Example:



The crocodile sticker is 7 centimeter cubes long.



The tiger sticker is \_\_\_ centimeter cubes long.



The camel sticker is \_\_\_ centimeter cubes long.